

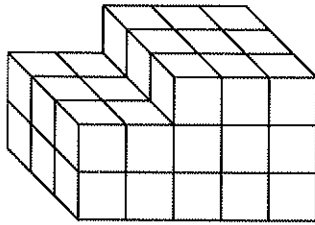
# Volume

Study Link  
11.5



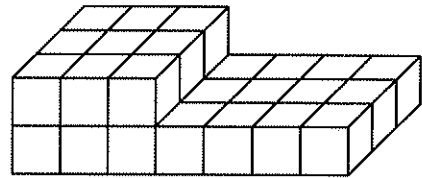
1. Find the volume of each stack of centimeter cubes.

a.



Volume = \_\_\_\_\_  $\text{cm}^3$

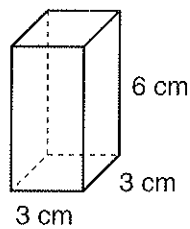
b.



Volume = \_\_\_\_\_  $\text{cm}^3$

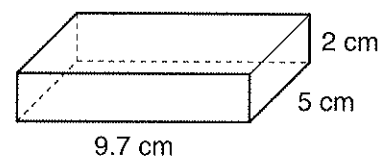
2. Calculate the volume.

a.



Volume = \_\_\_\_\_  $\text{cm}^3$

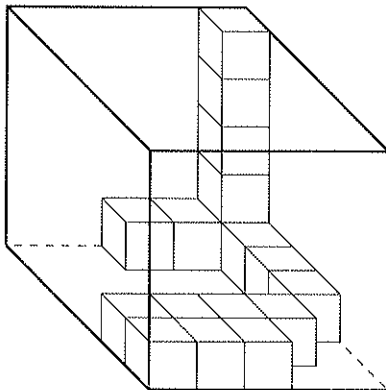
b.



Volume = \_\_\_\_\_  $\text{cm}^3$

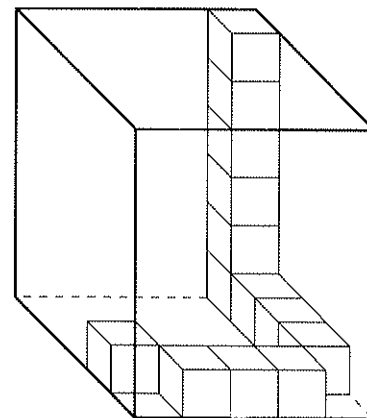
3. How many more cubes are needed to completely fill each box?

a.



\_\_\_\_\_ more cubes

b.



\_\_\_\_\_ more cubes